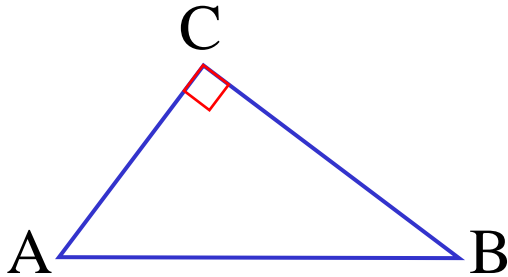


Harder Extension 1

Circle Geometry

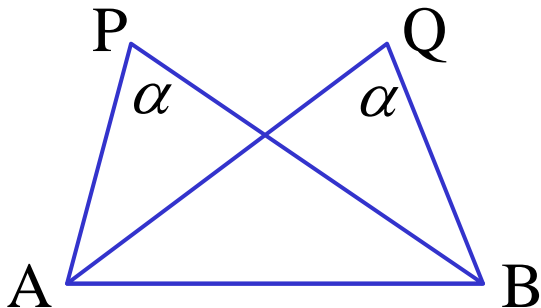
Converse Circle Theorems

(1) The circle whose diameter is the hypotenuse of a right angled triangle passes through the third vertex.



ABC are concyclic with AB diameter
(\angle in a semicircle = 90°)

(2) If an interval AB subtends the same angle at two points P and Q on the same side of AB, then A,B,P,Q are concyclic.

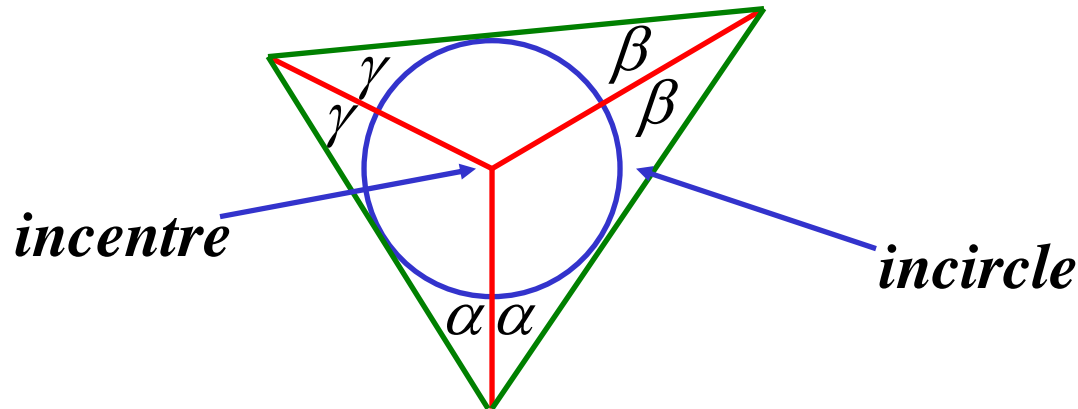


ABQP is a cyclic quadrilateral
(\angle 's in same segment are =)

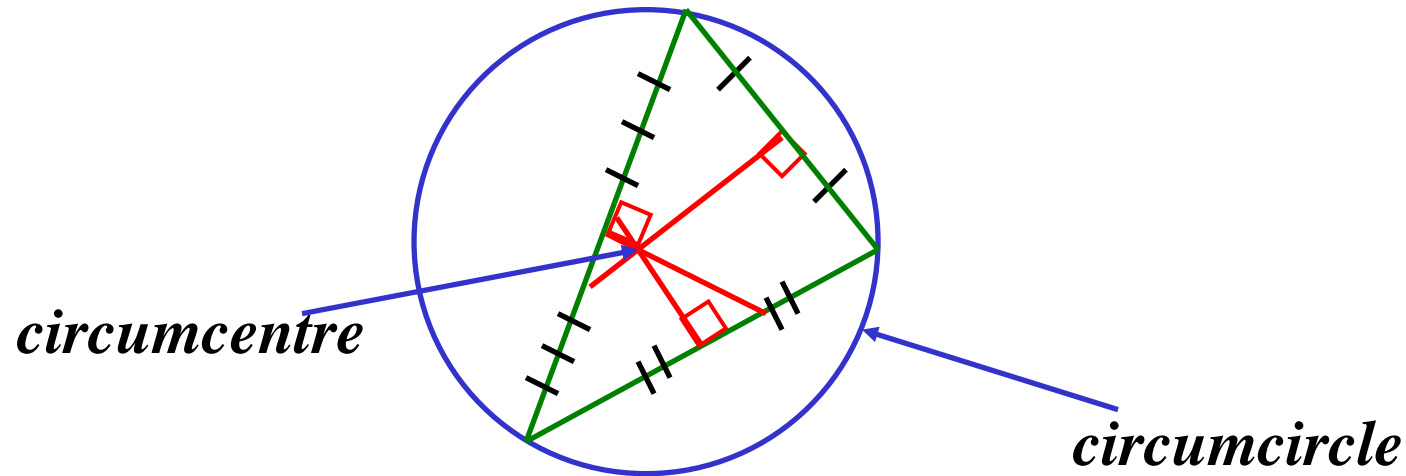
(3) If a pair of opposite angles in a quadrilateral are supplementary (or if an exterior angle equals the opposite interior angle) then the quadrilateral is cyclic.

The Four Centres Of A Triangle

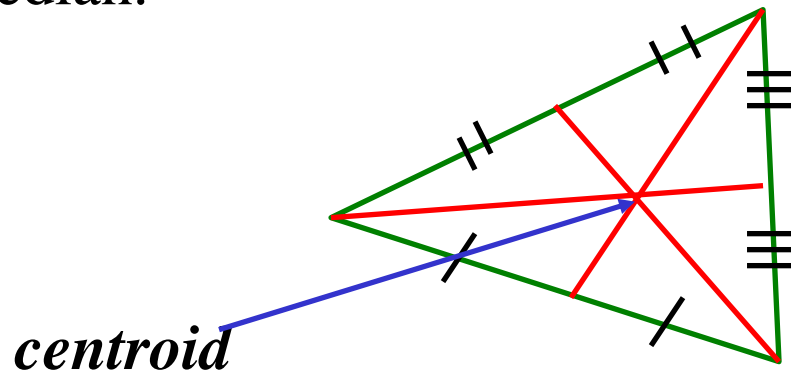
(1) The angle bisectors of the vertices are concurrent at the *incentre* which is the centre of the *incircle*, tangent to all three sides.



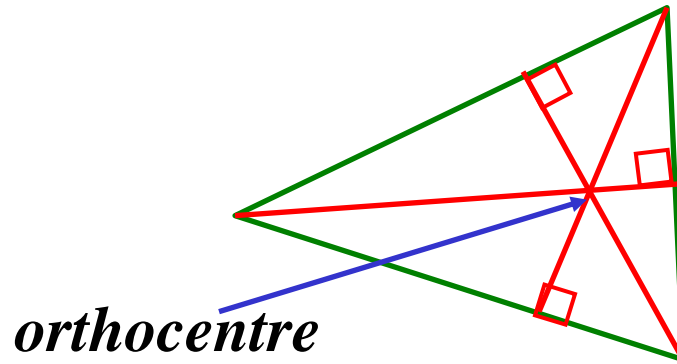
- (2) The perpendicular bisectors of the sides are concurrent at the *circumcentre* which is the centre of the *circumcircle*, passing through all three vertices.



- (3) The medians are concurrent at the *centroid*, and the centroid trisects each median.



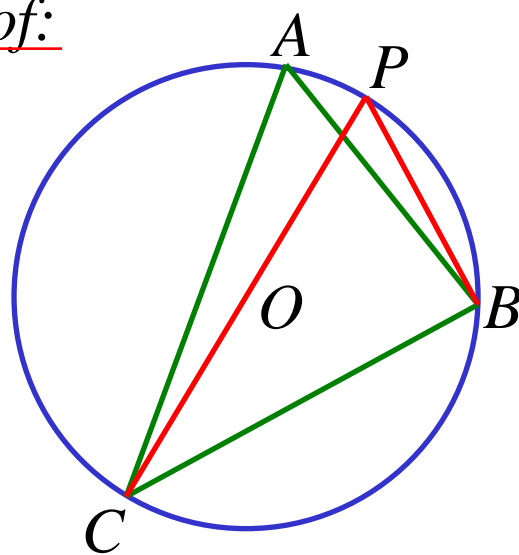
(4) The altitudes are concurrent at the *orthocentre*.



Interaction Between Geometry & Trigonometry

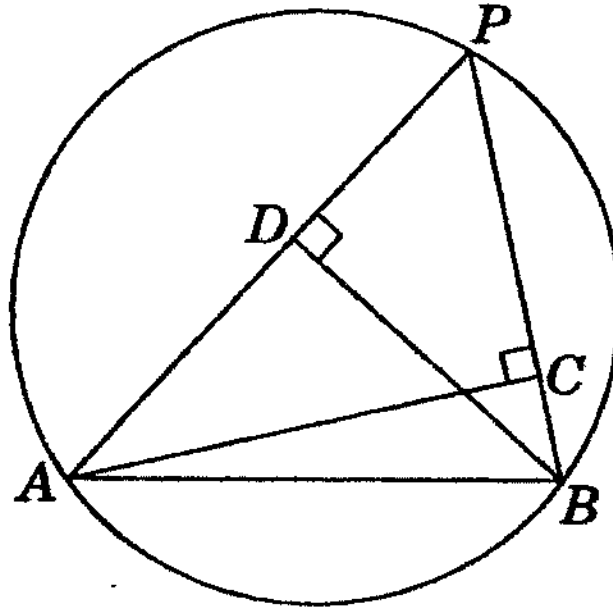
$$\frac{a}{\sin A} = \frac{b}{\sin B} = \frac{c}{\sin C} = \text{diameter of circumcircle}$$

Proof:



$$\begin{aligned} \angle A &= \angle P && (\angle \text{ in same segment } =) \\ \therefore \sin A &= \sin P \\ \angle PBC &= 90^\circ && (\angle \text{ in semicircle } = 90^\circ) \\ \frac{BC}{PC} &= \sin P \\ \frac{BC}{\sin P} &= PC && \therefore PC = \frac{BC}{\sin A} \end{aligned}$$

e.g. (1990)



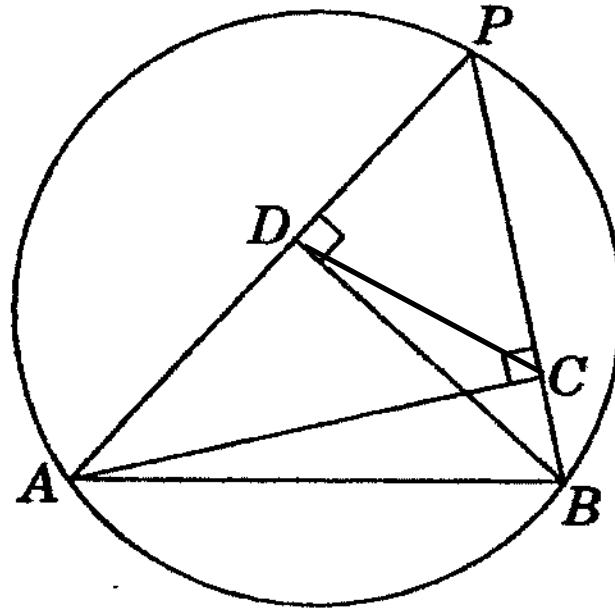
In the diagram, AB is a fixed chord of a circle, P a variable point in the circle and AC and BD are perpendicular to BP and AP respectively.

(i) Show that $ABCD$ is a cyclic quadrilateral on a circle with AB as diameter.

$$\angle BDA = \angle ACB = 90^\circ \quad (\text{given})$$

$\therefore ABCD$ is a cyclic quadrilateral $\quad (\angle\text{'s in same segment are =)}$

AB is diameter as \angle in semicircle $= 90^\circ$

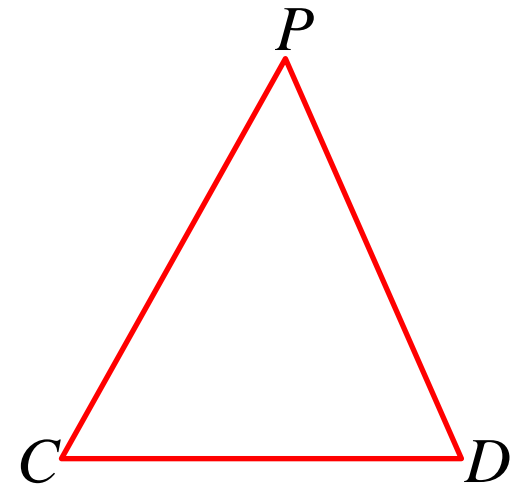
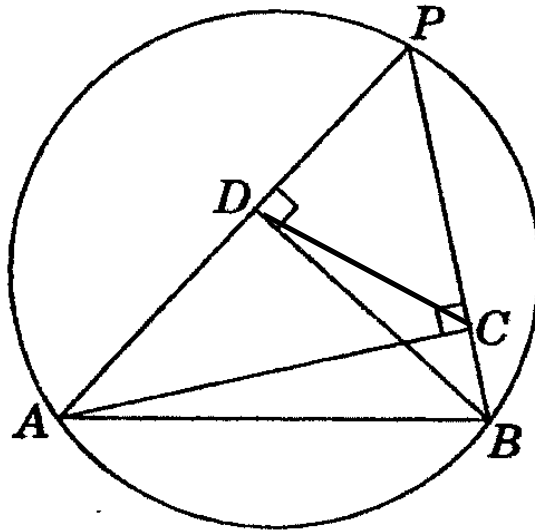
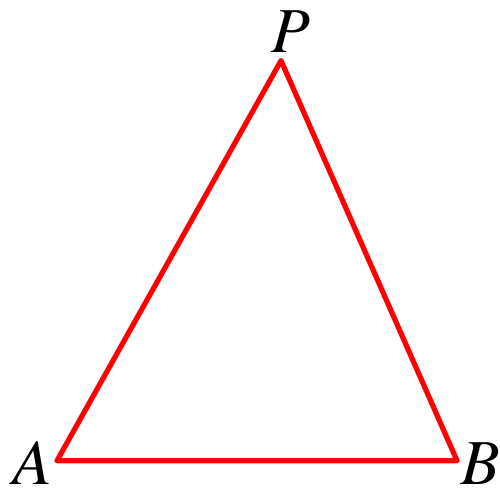


(ii) Show that triangles PCD and APB are similar

$$\angle APB = \angle DPC \quad (\text{common } \angle\text{'s})$$

$$\angle PDC = \angle PBA \quad (\text{exterior } \angle \text{ cyclic quadrilateral})$$

$$\therefore \underline{\Delta PDC \parallel \Delta PBA} \quad (\text{equiangular})$$



(iii) Show that as P varies, the segment CD has constant length.

$$\frac{CD}{AB} = \frac{PC}{AP}$$

(ratio of sides in $\parallel \Delta$'s)

In ΔPCA , $\frac{PC}{AP} = \cos P$

$$\therefore \frac{CD}{AB} = \cos P$$

$$CD = AB \cos P$$

Now, $\angle P$ is constant

(\angle 's in same segment are =)

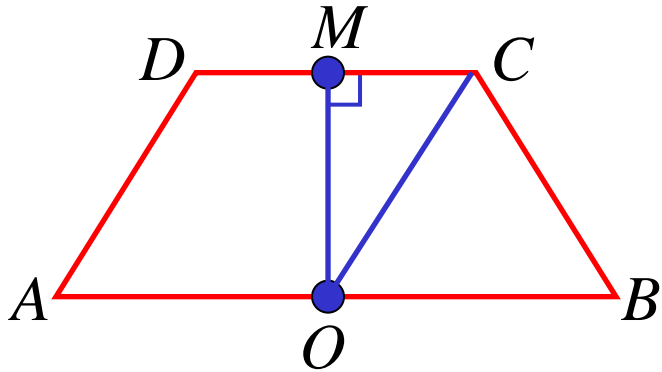
and AB is fixed

(given)

$\therefore CD$ is constant

(iv) Find the locus of the midpoint of CD .

$ABCD$ is a cyclic quadrilateral with AB diameter.



Let M be the midpoint of CD

O is the midpoint of AB

OM is constant

(= chords are equidistant from the centre)

$\therefore M$ is a fixed distance from O

$$\begin{aligned} OM^2 &= OC^2 - MC^2 \\ &= \left(\frac{1}{2}AB\right)^2 - \left(\frac{1}{2}AB \cos P\right)^2 \end{aligned}$$

$$= \frac{1}{4}AB^2 - \frac{1}{4}AB^2 \cos^2 P$$

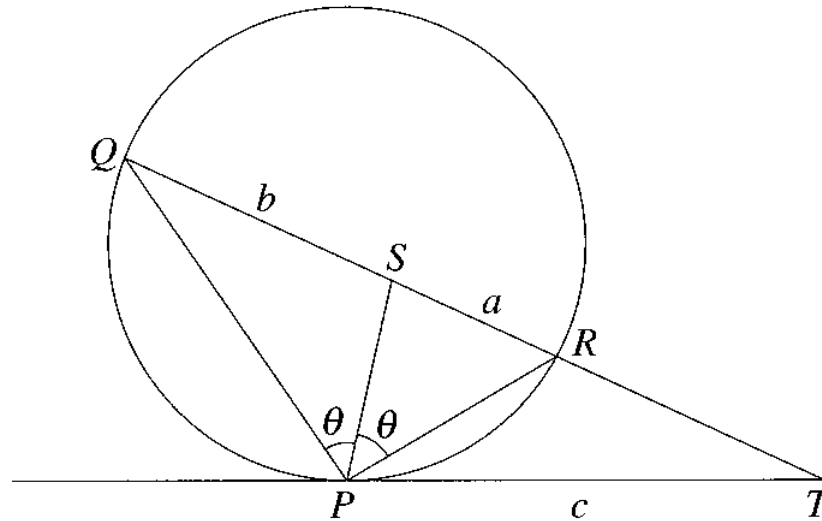
$$= \frac{1}{4}AB^2 \sin^2 P$$

$$OM = \frac{1}{2}AB \sin P$$

\therefore locus is circle, centre O

$$\text{and radius} = \frac{1}{2}AB \sin P$$

2008 Extension 2 Question 7b)



In the diagram, the points P , Q and R lie on a circle. The tangent at P and the secant QR intersect at T . The bisector of $\angle PQR$ meets QR at S so that $\angle QPS = \angle RPS = \theta$. The intervals RS , SQ and PT have lengths a , b and c respectively.

(i) Show that $\angle TSP = \angle TPS$

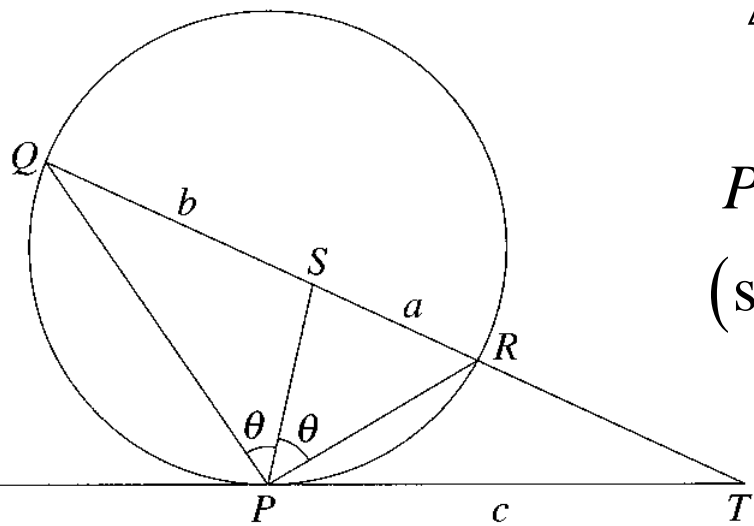
$$\angle RQP = \angle RPT \quad \text{(alternate segment theorem)}$$

$$\angle TSP = \angle RQP + \angle SPQ \quad \text{(exterior } \angle, \Delta SPQ)$$

$$\angle TSP = \angle RPT + \theta$$

$$\therefore \underline{\angle SPT = \angle TSP}$$

(ii) Hence show that $\frac{1}{a} = \frac{1}{b} + \frac{1}{c}$



ΔTPS is isosceles ($2 = \angle$'s)

$\therefore ST = c$ (= sides in isosceles Δ)

$PT^2 = QT \times RT$ (common \angle)

(square of tangents = products of intercepts)

$$c^2 = (c + b)(c - a)$$

$$c^2 = c^2 - ac + bc - ab$$

$$bc = ac + ab$$

$$\underline{\underline{\frac{1}{a} = \frac{1}{b} + \frac{1}{c}}}$$

Past HSC Papers

Exercise 10C*