



## Caringbah High School

# 2014

### Trial HSC Examination

# Mathematics Extension I

#### General Instructions

- Reading time – 5 minutes
- Working time – 2 hours
- Write using black or blue pen (Black pen is preferred)
- Board-approved calculators may be used
- A table of standard integrals is provided at the back of this paper
- In Questions 11–14, show relevant mathematical reasoning and/or calculations

Total marks – 70

**Section I** Pages 2 – 4

**10 marks**

- Attempt Questions 1–10
- Allow about 15 minutes for this section

**Section II** Pages 5 – 8

**60 marks**

- Attempt Questions 11–14
- Allow about 1 hour and 45 minutes for this section

**Question 1 - 10** (1 mark each) Answer on page provided.

1) The remainder when  $P(x) = 2x^3 + x^2 - 5x - 3$  is divided by  $x + 1$  is:

- A)  $-3$                       B)  $-5$                       C)  $1$                       D)  $-1$

2)  $\int \frac{1}{3+x^2} dx$  is given by:

- A)  $\tan^{-1}\sqrt{3}x + c$                       B)  $\frac{1}{3}\tan^{-1}\frac{x}{3} + c$   
 C)  $\frac{1}{3}\tan^{-1}3x + c$                       D)  $\frac{1}{\sqrt{3}}\tan^{-1}\frac{x}{\sqrt{3}} + c$

3) Given the function  $f(x): y = \frac{2}{x+1}$ , then its inverse function  $f^{-1}(x)$  in terms of  $x$  is given by:

- A)  $y = \frac{2-x}{x}$                       B)  $y = \frac{x+1}{2}$   
 C)  $y = \frac{2-x}{2}$                       D)  $y = \frac{2+x}{x}$

4)  $\lim_{x \rightarrow 0} \frac{\sin 3x}{x}$  is equal to:

- A)  $1$                       B)  $\frac{1}{3}$                       C)  $-3$                       D)  $3$

5) The solution to the equation  $3^{x-1} = 5$  is given by:

A)  $x = \frac{\ln 5}{\ln 3} + 1$

B)  $x = \frac{\ln 5}{\ln 3} - 1$

C)  $x = \frac{\ln 3}{\ln 5} + 1$

D)  $x = \frac{\ln 3}{\ln 5} - 1$

6) The general solution to the equation  $2\sin \theta = \sqrt{3}$  is given by:

A)  $\theta = k\pi + \frac{\pi}{3}$

B)  $\theta = k\pi + (-1)^k \frac{\pi}{3}$

C)  $\theta = k\pi + (-1)^k \frac{\pi}{6}$

D)  $\theta = 2k\pi \pm \frac{\pi}{3}$

7) If two of the roots of  $2x^3 - gx^2 + hx - 8 = 0$  are  $-1$  and  $2$ , the other root is:

A)  $-2$

B)  $2$

C)  $-4$

D)  $4$

8) If  $f(x) = \sin^2(3-x)$ , then  $f'(0)$  is equal to:

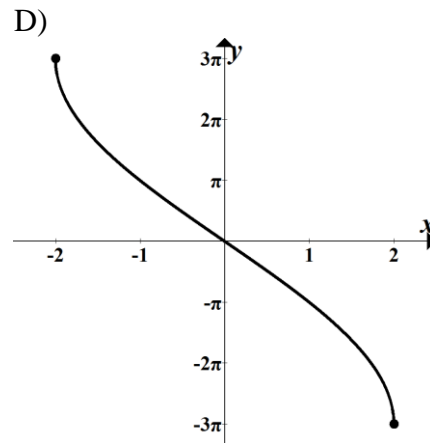
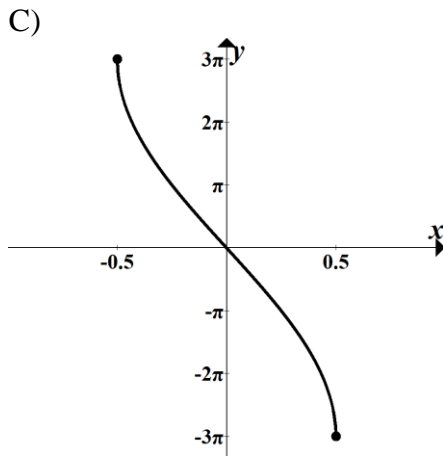
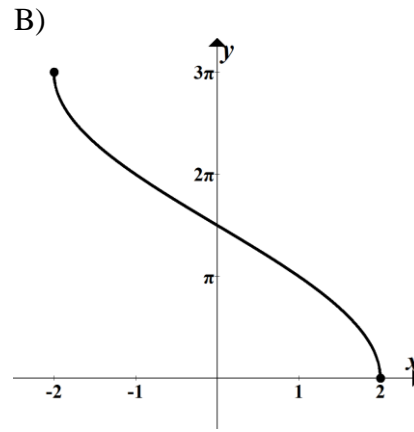
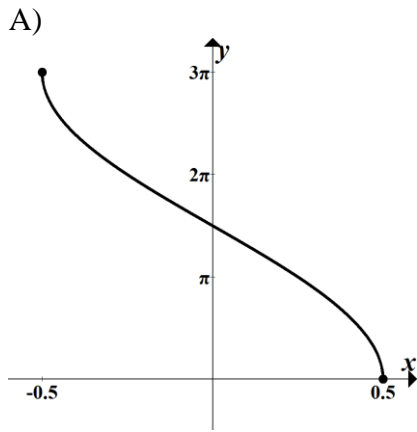
A)  $-2\cos(3)$

B)  $-2\sin(3)\cos(3)$

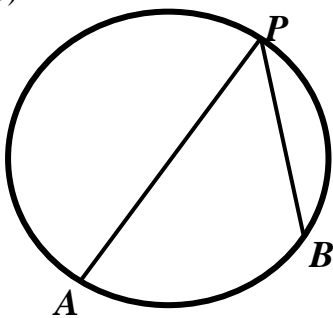
C)  $2\sin(3)\cos(3)$

D)  $6\sin(3)\cos(3)$

9) The graph of  $y = 3\cos^{-1}\left(\frac{x}{2}\right)$  is:



10)



$AP$  is a diameter of the circle.

If  $\angle APB = 40^\circ$ , then  $\angle PAB$  is:

A)  $60^\circ$

B)  $40^\circ$

C)  $50^\circ$

D) not enough information

**END OF MULTIPLE CHOICE QUESTIONS**

**Section II****60 marks****Attempt all questions 11–14****Allow about 1 hour and 45 minutes for this section**

Answer each question in a SEPARATE writing booklet. Extra writing booklets are available.

In Questions 11–14, your responses should include relevant mathematical reasoning and/or calculations.

- | <b>Question 11</b> (15 marks) Start a NEW booklet.                                                                                                                  | <b>Marks</b> |
|---------------------------------------------------------------------------------------------------------------------------------------------------------------------|--------------|
| a) Solve $\frac{2x}{x-1} < 3$ .                                                                                                                                     | 2            |
| b) Find the acute angle between the lines $x - 2y + 3 = 0$ and $3x + y + 6 = 0$ .<br>[Answer to the <b>nearest degree</b> ]                                         | 2            |
| c) Use the substitution $t = \tan \frac{\theta}{2}$ to express $1 + \tan \theta \tan \frac{\theta}{2}$ as a fraction in simplest form.                              | 2            |
| d) Find $\int \sin^2 x \, dx$ .                                                                                                                                     | 2            |
| e) Given that a root of $y = 3x + \ln x - 1$ lies close to $x = 0.4$ , use Newton's method once to find an improved value of that root correct to 2 decimal places. | 2            |
| f) Solve $\cos 2\theta = \cos \theta$ where $0 \leq \theta \leq 2\pi$ .                                                                                             | 2            |
| g) i) Write down the expansion of $\sin(A - B)$ .                                                                                                                   | 1            |
| ii) Hence show that $\sin 15^\circ = \frac{\sqrt{6} - \sqrt{2}}{4}$ .                                                                                               | 2            |

**Question 12** (15 marks) Start a NEW booklet.**Marks**

- a) The variable point  $(3t, 4t^2)$  lies on a parabola. 2

Find the cartesian equation of this parabola.

- b) Find the domain of  $y = \ln(\sin^{-1} x)$ . 2

- c) Consider the function  $f(x) = \frac{3x}{x^2 - 1}$ .

- i) Show that the function is odd. 1

- ii) Show that the function is decreasing for all values of  $x$ . 2

- iii) Neatly sketch the graph of  $f(x) = \frac{3x}{x^2 - 1}$  showing clearly the 2

equations of any asymptotes.

- d) Use the substitution  $u = x^2 - 2$  to evaluate  $\int_{\sqrt{3}}^{\sqrt{11}} \frac{x}{\sqrt{x^2 - 2}} dx$  3

- e) At time  $t$  hours after an oil spill occurs, a circular oil slick has a radius 3

of ' $r$ ' kilometres, where  $r = \sqrt{t + 1} - 1$ .

Find the rate at which the area of the slick is increasing when the radius is 1 kilometre.

**Question 13** (15 marks) Start a NEW booklet.**Marks**

a) Find the exact value of  $\cos\left(\sin^{-1}\left(\frac{3}{4}\right)\right)$ . 1

b) i) Given that  $A > 0$  and  $0 < \alpha < \frac{\pi}{2}$ , show that when  $\cos x - \sin x$  is expressed in the form  $A\cos(x + \alpha)$ , that  $A = \sqrt{2}$  and  $\alpha = \frac{\pi}{4}$ . 2

ii) Hence solve  $\cos x - \sin x = \frac{1}{\sqrt{2}}$  for  $0 \leq x \leq 2\pi$ . 2

c) A cake is cooling after being taken out of the oven. The surrounding temperature in the room is  $20^\circ\text{C}$ .

At a time ' $t$ ' minutes, its temperature  $T$  decreases according to the equation

$$\frac{dT}{dt} = -k(T - 20) \text{ where 'k' is a positive constant. The initial temperature}$$

of the cake immediately after removal from the oven was  $180^\circ\text{C}$  and it cools to  $120^\circ\text{C}$  after 5 minutes.

i) Show that  $T = 20 + Ae^{-kt}$  is a solution to  $\frac{dT}{dt} = -k(T - 20)$ , where  $A$  is a constant. 1

ii) Find the values of  $A$  and  $k$ . 2

iii) How long will it take for the cake to cool to  $60^\circ\text{C}$ ? 2  
(Answer to the nearest minute)

*Question 13 continues on the next page*

**Question 13 continued.****Marks**

- d) The two points  $P(2ap, ap^2)$  and  $Q(2aq, aq^2)$  are on the parabola  $x^2 = 4ay$ .
- i) Show that the equation of the tangent at  $P$  is given by  $y = px - ap^2$ . 1
- ii) The tangents at  $P$  and  $Q$  meet at  $T$ . 2  
Show that  $T$  has coordinates  $[a(p + q), apq]$ .
- iii)  $P$  and  $Q$  move in such a way that  $\angle POQ$  is always  $90^\circ$ . ( $O$  is the origin). 1  
Show that  $pq = -4$ .
- iv) Hence deduce the locus of  $T$ . 1

**End of Question 13.**



**Question 14** (15 marks) Start a NEW booklet.

**Marks**

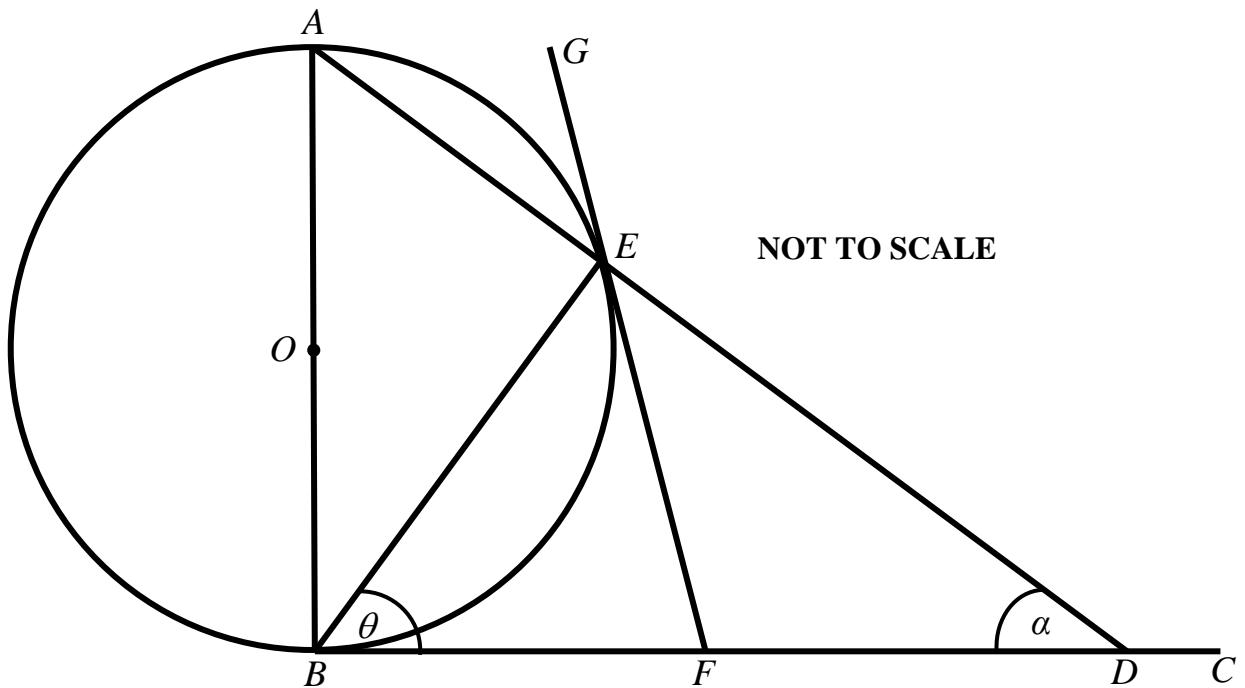
- a) The polynomial  $P(x) = 4x^3 + kx + 6$  has  $(x+3)$  as a factor. 2

Find the value of  $k$  and express  $P(x)$  in the form  $(x+3)Q(x)$ .

- b) In the diagram below,  $AB$  is the diameter of the circle centre  $O$ , and  $BC$  is tangential to the circle at  $B$ .

The line  $AD$  intersects the circle at  $E$  and  $BC$  at  $D$ . The tangent to the circle at  $E$  intersects  $BC$  at  $F$ .

Let  $\angle EBF = \theta$  and  $\angle EDF = \alpha$ .



**Answer this question on the page provided**

- i) Prove that  $\angle FED = \frac{\pi}{2} - \theta$  2

- ii) Prove that  $BF = FD$ . 2

*Question 14 continues on the next page*

**Question 14 continued.**

**Marks**

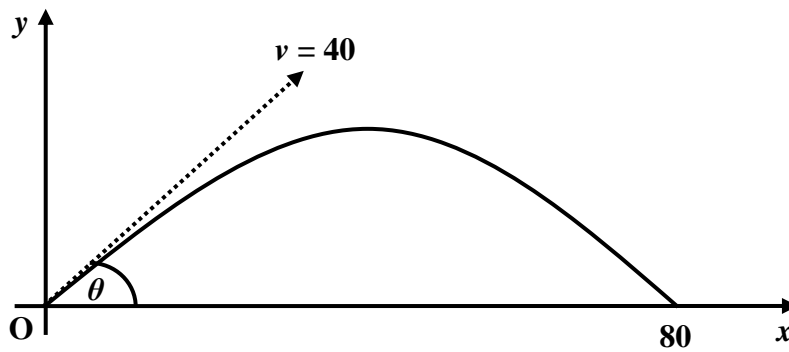
c) Prove by Mathematical Induction that

3

$$1 \times 3 + 2 \times 3^2 + \dots + n \times 3^n = \frac{(2n-1)3^{n+1} + 3}{4}$$

where  $n$  is an integer,  $n \geq 1$ .

d)



An arrow fired from ground level at a velocity of 40 m/s, is to strike the ground 80 metres away as shown in the diagram above.

i) Show that the vertical and horizontal displacement equations are given

2

respectively by:  $y = 40t\sin\theta - 5t^2$  and  $x = 40t\cos\theta$ . (Assume  $g = 10 \text{ m/s}^2$ )

ii) Hence, find the two angles at which the arrow can be fired.

4

**END OF EXAM**

Candidate Name/Number: \_\_\_\_\_

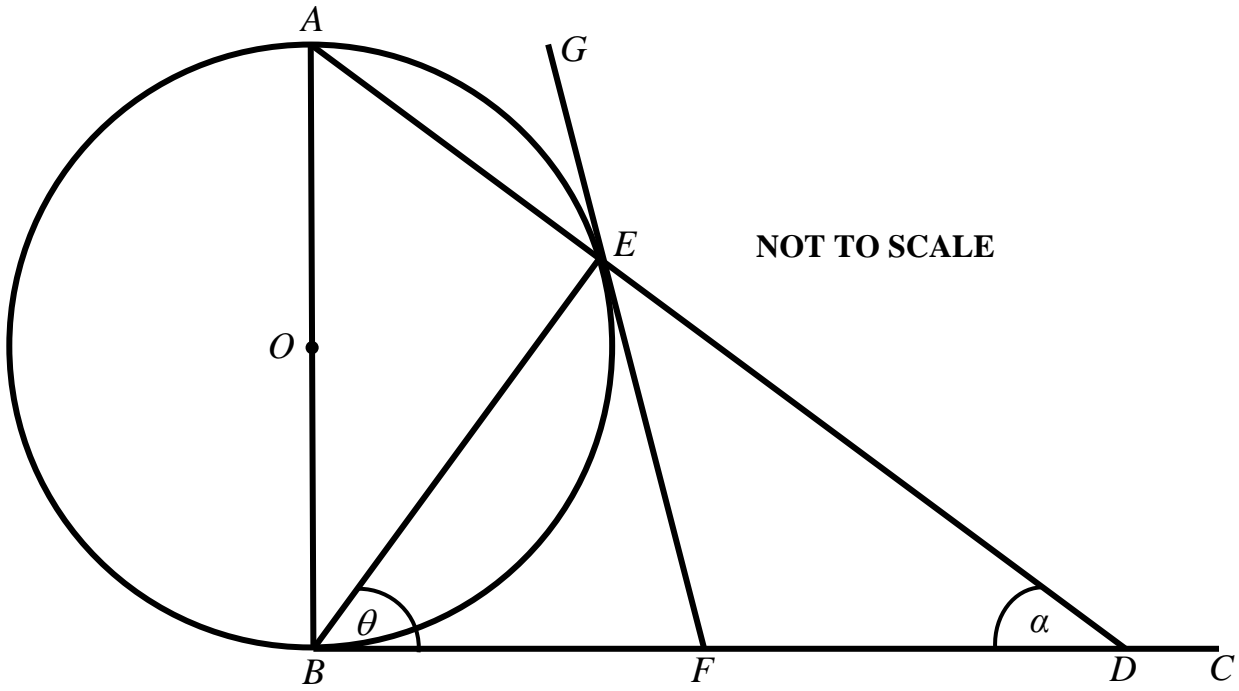
Multiple choice answer page. Fill in either A, B, C or D for questions 1-10.

This page must be handed in with your answer booklets

1.	
2.	
3.	
4.	
5.	

6.	
7.	
8.	
9.	
10.	

Question 14b (additional diagram) Candidate Name/Number: \_\_\_\_\_



**Hand this page in inside the Question 14 booklet**

---

---

---

---

---

---

---

---

---

---

---

---

---

---

---

---

**STANDARD INTEGRALS**

$$\int x^n dx = \frac{1}{n+1} x^{n+1}, \quad n \neq -1; \quad x \neq 0, \text{ if } n < 0$$

$$\int \frac{1}{x} dx = \ln x, \quad x > 0$$

$$\int e^{ax} dx = \frac{1}{a} e^{ax}, \quad a \neq 0$$

$$\int \cos ax dx = \frac{1}{a} \sin ax, \quad a \neq 0$$

$$\int \sin ax dx = -\frac{1}{a} \cos ax, \quad a \neq 0$$

$$\int \sec^2 ax dx = \frac{1}{a} \tan ax, \quad a \neq 0$$

$$\int \sec ax \tan ax dx = \frac{1}{a} \sec ax, \quad a \neq 0$$

$$\int \frac{1}{a^2 + x^2} dx = \frac{1}{a} \tan^{-1} \frac{x}{a}, \quad a \neq 0$$

$$\int \frac{1}{\sqrt{a^2 - x^2}} dx = \sin^{-1} \frac{x}{a}, \quad a > 0, \quad -a < x < a$$

$$\int \frac{1}{\sqrt{x^2 - a^2}} dx = \ln \left( x + \sqrt{x^2 - a^2} \right), \quad x > a > 0$$

$$\int \frac{1}{\sqrt{x^2 + a^2}} dx = \ln \left( x + \sqrt{x^2 + a^2} \right)$$

NOTE :  $\ln x = \log_e x, \quad x > 0$

**Multiple Choice Section:**

- 1.C      2.D      3.A      4.D      5.A  
 6.B      7.A      8.B      9.B      10.C

**Question 1.**

The remainder is given by  $P(-1)$   
 $= 2(-1) + 1 - 5(-1) - 3 = 1$  ----- [C]

**Question 2.**

$$\int \frac{1}{3+x^2} dx = \int \frac{1}{\sqrt{3^2+x^2}} dx$$

$$\frac{1}{\sqrt{3}} \tan^{-1} \frac{x}{\sqrt{3}} + c$$
 ----- [D]

**Question 3.**

$f(x): y = \frac{2}{x+1} \rightarrow f^{-1}(x): x = \frac{2}{y+1}$

$\therefore xy + x = 2 \rightarrow xy = 2 - x$

$\therefore y = \frac{2-x}{x}$  ----- [A]

**Question 4.**

$$\lim_{x \rightarrow 0} \frac{\sin 3x}{x} = 3 \lim_{x \rightarrow 0} \frac{\sin 3x}{3x}$$

$$= 3 \times 1 = 3$$
 ----- [D]

**Question 5.**

$3^{x-1} = 5 \rightarrow x - 1 = \log_3 5$

$\therefore x = 1 + \log_3 5$

$= 1 + \frac{\ln 5}{\ln 3}$  ----- [A]

**Question 6.**

$\sin \theta = \frac{\sqrt{3}}{2} \rightarrow$  Acute angle  $\theta = \frac{\pi}{3}$

$\therefore \theta = k\pi + (-1)^k \frac{\pi}{3}$  ----- [B]

**Question 7.**

product of roots =  $-\frac{d}{a}$

$\therefore -1 \times 2 \times \alpha = \frac{-(-8)}{2} = 4$

$\therefore \alpha = -2$  ----- [A]

**Question 8.**

$f(x) = \sin^2(3-x) \rightarrow f'(x) = -2\sin(3-x)\cos(3-x)$

$\therefore f'(0) = -2\sin(3)\cos(3)$  ----- [B]

**Question 9.**

Domain:  $-1 \leq \frac{x}{2} \leq 1 \rightarrow -2 \leq x \leq 2$

Range:  $0 \leq y \leq 3\pi$  ----- [B]

**Question 10.**

$\angle PBA = 90^\circ \{ \angle \text{ in semi-circle} \}$

Given  $\angle APB = 40^\circ \rightarrow \angle PAB = 50^\circ \{ \angle \text{ sum } \Delta APB \}$

----- [C]

**Question 11.**

a) CV1:  $2x = 3(x-1) \rightarrow x = 3$

CV2:  $x = 1$

On testing  $x < 1$  and  $x > 3$ , note  $x \neq 1$

**Question 11 continued.**

$$\begin{aligned} \text{b) } x - 2y + 3 = 0 &\rightarrow m_1 = \frac{1}{2} \\ 3x + y + 6 = 0 &\rightarrow m_2 = -3 \end{aligned}$$

$$\therefore \tan \theta = \left| \frac{\frac{1}{2} - (-3)}{1 + \frac{1}{2} \times (-3)} \right| = 7$$

$$\therefore \theta = 81^\circ 52' \text{ (NOTE: accept } 82^\circ \text{)}$$

$$\text{c) } 1 + \tan \theta \tan \frac{\theta}{2} = 1 + \frac{2t}{1-t^2} \times t$$

$$= \frac{1-t^2 + 2t^2}{1-t^2}$$

$$= \frac{1+t^2}{1-t^2}$$

$$\text{d) } \cos 2x = 1 - 2\sin^2 x \rightarrow \sin^2 x = \frac{1}{2}(1 - \cos 2x)$$

$$\therefore I = \frac{1}{2} \int 1 - \cos 2x \, dx$$

$$= \frac{1}{2} \left( x - \frac{1}{2} \sin 2x \right) + c$$

$$= \frac{x}{2} - \frac{1}{4} \sin 2x + c$$

$$\text{e) Let } P(x) = 3x + \ln x - 1 \rightarrow P'(x) = 3 + \frac{1}{x}$$

$$a_1 = a_0 - \frac{P(a_0)}{P'(a_0)} \text{ (Newton's method)}$$

$$\boxed{P(0.4) = -0.7163; P'(0.4) = 5.5}$$

$$\begin{aligned} \therefore a_1 &= 0.4 - \frac{-0.7163}{5.5} \\ &\approx 0.53 \text{ (2 dp)} \end{aligned}$$

$$\text{f) } 2\cos^2 \theta - 1 = \cos \theta$$

$$\therefore 2\cos^2 \theta - \cos \theta - 1 = 0$$

$$(2\cos \theta + 1)(\cos \theta - 1) = 0$$

$$\therefore \cos \theta = -\frac{1}{2} \text{ and } \cos \theta = 1$$

$$\therefore \theta = \frac{2\pi}{3}, \frac{4\pi}{3}, 0, 2\pi$$

$$\text{g) i) } \sin(A - B) = \sin A \cos B - \sin B \cos A$$

$$\text{ii) } \sin(45^\circ - 30^\circ) = \sin 45^\circ \cos 30^\circ - \sin 30^\circ \cos 45^\circ$$

$$\therefore \sin 15^\circ = \frac{1}{\sqrt{2}} \times \frac{\sqrt{3}}{2} - \frac{1}{2} \times \frac{1}{\sqrt{2}}$$

$$= \frac{\sqrt{3} - 1}{2\sqrt{2}} \times \frac{\sqrt{2}}{\sqrt{2}}$$

$$= \frac{\sqrt{6} - \sqrt{2}}{4}$$

[Note: Could also use  $\sin(60^\circ - 45^\circ)$ ]

**Question 12.**

$$\text{a) } x = 3t \rightarrow t = \frac{x}{3}$$

$$\therefore y = 4t^2 \rightarrow y = 4\left(\frac{x}{3}\right)^2$$

$$\therefore y = \frac{4x^2}{9} \text{ or } 4x^2 = 9y$$

$$\text{b) For } \sin^{-1} x: \boxed{D: -1 \leq x \leq 1}$$

$$\text{and for } \ln(x): \boxed{D: x > 0}$$

$$\therefore \text{for } \ln(\sin^{-1} x): \boxed{D: 0 < x \leq 1}$$

$$\text{c) i) A function is odd if } f(-x) = -f(x)$$

$$f(x) = \frac{3x}{x^2 - 1} \rightarrow f(-x) = \frac{3(-x)}{(-x)^2 - 1}$$

$$= \frac{-3x}{x^2 - 1} = -f(x)$$

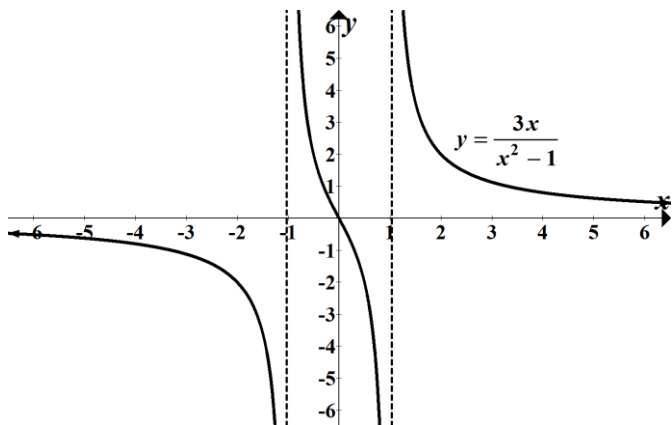
$$\text{ii) A function is decreasing if } f'(x) < 0 \text{ for all } x$$

$$f'(x) = \frac{(x^2 - 1) \times 3 - 3x \times 2x}{(x^2 - 1)^2}$$

$$= \frac{-3(x^2 + 1)}{(x^2 - 1)^2} < 0 \text{ for all } x$$

**Question 12 continued:**

- c) iii) Vertical asymptotes at  $x = \pm 1$   
 Horizontal asymptote at  $y = 0$  ( $x$ -axis)



d)  $u = x^2 \rightarrow du = 2x dx$

When  $x = \sqrt{3}, u = 1; x = \sqrt{11}, u = 9$

$$\begin{aligned} \therefore I &= \frac{1}{2} \int_1^9 \frac{1}{\sqrt{u}} du = \frac{1}{2} \int_1^9 u^{-1/2} du \\ &= \frac{1}{2} \left[ 2u^{1/2} \right]_1^9 = 3 - 1 = 2 \end{aligned}$$

e)  $A = \pi r^2; r = \sqrt{t+1} - 1 \rightarrow r + 1 = \sqrt{t+1}$

$$\frac{dA}{dt} = \frac{dA}{dr} \times \frac{dr}{dt} \text{ [chain rule]}$$

$$= 2\pi r \times \frac{1}{2}(t+1)^{-1/2}$$

$$= \pi r \times \frac{1}{\sqrt{(t+1)}}$$

$$\therefore \frac{dA}{dt} = \pi r \times \frac{1}{r+1}$$

and when  $r = 1$ :

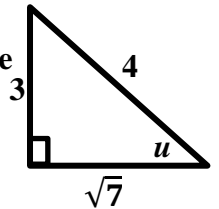
$$\therefore \frac{dA}{dt} = \pi \times 1 \times \frac{1}{1+1} = \frac{\pi}{2} km/h$$

**Question 13.**

- a) Let  $u = \sin^{-1}\left(\frac{3}{4}\right)$  and evaluate  $\cos u$

$$u = \sin^{-1}\left(\frac{3}{4}\right) \rightarrow \sin u = \frac{3}{4}$$

$$\begin{aligned} \cos u &= \sqrt{1 - \sin^2 u} \text{ or use a triangle} \\ &= \sqrt{1 - 9/16} = \sqrt{7/16} \end{aligned}$$



$$\therefore \cos u = \frac{\sqrt{7}}{4} = \cos\left(\sin^{-1}\left(\frac{3}{4}\right)\right)$$

- b) i) Let  $\cos x - \sin x = A \cos(x + \alpha)$   
 $= A \cos \alpha \cos x - A \sin \alpha \sin x$

Equating coefficients of  $\cos x$  and  $\sin x$  gives:

$$A \cos \alpha = 1 \text{ --- [1] and } A \sin \alpha = 1 \text{ --- [2]}$$

$$[1]^2 + [2]^2 \rightarrow A^2(\cos^2 x + \sin^2 x) = 2$$

$$\therefore A^2 = 2 \rightarrow A = \sqrt{2}$$

$$\text{Using [1] with } A = \sqrt{2} \rightarrow \cos \alpha = \frac{1}{\sqrt{2}}$$

$$\therefore \alpha = \frac{\pi}{4}$$

- ii)  $\cos x - \sin x = \frac{1}{\sqrt{2}}$

$$\therefore \sqrt{2} \cos\left(x + \frac{\pi}{4}\right) = \frac{1}{\sqrt{2}} \rightarrow \cos\left(x + \frac{\pi}{4}\right) = \frac{1}{2}$$

$$\therefore x + \frac{\pi}{4} = \frac{\pi}{3}, \frac{5\pi}{3}$$

$$\text{hence } x = \frac{\pi}{12}, \frac{17\pi}{12}$$

- c) i)  $T = 20 + Ae^{-kt} \rightarrow Ae^{-kt} = T - 20$

$$LHS = \frac{d(20 + Ae^{-kt})}{dt}$$

$$= -kAe^{-kt}$$

$$= -k(T - 20) = RHS$$



cii) when  $t=0, T=180^\circ; t=5, T=120^\circ$

$$\therefore 180 = 20 + Ae^0 \rightarrow A = 160$$

also  $120 = 20 + 160e^{-5k}$

$$\therefore \frac{10}{16} = e^{-5k} \rightarrow -5k = \ln\left(\frac{5}{8}\right)$$

$$\therefore k = -\frac{1}{5}\ln\left(\frac{5}{8}\right) \rightarrow k \approx 0.094$$

ii)  $60 = 20 + 160e^{-kt}$

$$\therefore \frac{1}{4} = e^{-0.094t}$$

$$\therefore \ln\left(\frac{1}{4}\right) = -0.094t \rightarrow t \approx 15 \text{ minutes}$$

d) i)  $y = \frac{x^2}{4a} \rightarrow m = \frac{dy}{dx} = \frac{x}{2a}$

At  $P: m = \frac{2ap}{2a} = p$

hence  $y - ap^2 = p(x - 2ap)$

$$y - ap^2 = px - 2ap^2$$

$$\therefore y = px - ap^2$$

ii)  $y = px - ap^2$  ----- [1]

at  $Q: y = qx - aq^2$  ----- [2]

$$[1] = [2] \rightarrow px - ap^2 = qx - aq^2$$

$$\therefore px - qx = ap^2 - aq^2$$

$$x(p - q) = a(p - q)(p + q)$$

$$\therefore x = a(p + q)$$

hence  $y = p \times a(p + q) - ap^2 = apq$

$$\therefore T[a(p + q), apq]$$

iii) since  $\angle POQ = 90^\circ, m_{OP} \times m_{OQ} = -1$

$$\therefore \frac{ap^2}{2ap} \times \frac{aq^2}{2aq} = -1$$

$$\therefore \frac{p}{2} \times \frac{q}{2} = -1 \rightarrow pq = -4$$

iv) Since  $pq = -4$

$$y = apq \rightarrow y = -4a$$

which is the locus of  $T$ .

**Question 14.**

a)  $P(x) = 4x^3 + kx + 6$

$$P(-3) = 0 \rightarrow -108 - 3k + 6 = 0$$

$$\therefore k = -34$$

so  $P(x) = 4x^3 - 34x + 6$

$$\therefore 4x^3 - 34x + 6 = (x + 3)(4x^2 + bx + 2)$$

on equating coefficients of  $x^2$ :

$$0 = b + 12 \rightarrow b = -12$$

$$\therefore P(x) = (x + 3)(4x^2 - 12x + 2)$$

**Note:[or use long division]**

b) i)  $\angle AEB = 90^\circ$  [ $\angle$  in semi-circle]

$BF = FE$  [tangents from external point equal]

$\therefore \triangle FBE$  is isosceles

$\therefore \angle FEB = \theta$  [ $\angle$ 's opposite equal sides in isos  $\Delta$ ]

and since  $\angle BED = 90^\circ$ , then

$$\angle FED = 90^\circ - \theta = \frac{\pi}{2} - \theta.$$

ii) Using  $\triangle ABD: \alpha = 180^\circ - \angle ABD - \angle BAD$

$$= 180^\circ - 90^\circ - \theta$$

$$= 90^\circ - \theta \text{ or } \left(\frac{\pi}{2} - \theta\right)$$

$\therefore \triangle FED$  is isosceles with  $FE = FD$

[sides opposite equal  $\angle$ 's in isos  $\Delta$ ]

and also since  $FE = BF$ , then  $BF = FD$ .

c)  $1 \times 3 + 2 \times 3^2 + \dots + n \times 3^n = \frac{(2n-1)3^{n+1} + 3}{4}$

When  $n = 1: LHS = 1 \times 3 = 3$

$$RHS = \frac{(2 \times 1 - 1) \times 3^2 + 3}{4}$$

$$= \frac{9 + 3}{4} = 3 \quad \therefore \text{true for } n=1.$$

**Question 14 continued:**

Assume true for  $n = k$ : i.e.

$$1 \times 3 + 2 \times 3^2 + \dots + k \times 3^k = \frac{(2k-1)3^{k+1} + 3}{4}$$

Prove true for  $n = k$ :

i.e.  $S_k + T_{k+1} = S_{k+1}$

$$S_k = \frac{(2k-1)3^{k+1} + 3}{4}; S_{k+1} = \frac{(2k+1)3^{k+2} + 3}{4}; T_{k+1} = (k+1) \times 3^{k+1}$$

$$\begin{aligned} LHS &= \frac{(2k-1)3^{k+1} + 3}{4} + (k+1) \times 3^{k+1} \\ &= \frac{(2k-1)3^{k+1} + 3 + 4(k+1) \times 3^{k+1}}{4} \\ &= \frac{3^{k+1}(2k-1 + 4(k+1)) + 3}{4} \\ &= \frac{3^{k+1}(6k+3) + 3}{4} \\ &= \frac{(2k+1) \times 3 \times 3^{k+1} + 3}{4} \\ &= \frac{(2k+1) \times 3^{k+2} + 3}{4} \\ &= S_{k+1} = RHS \end{aligned}$$

$\therefore$  If true for  $n = k$ , then true for  $n = k + 1$ .

Hence by the principle of mathematical induction,  
the result is true for all  $n \geq 1$ .

d) i)  $t = 0, y = 0, \dot{y} = 40 \sin \theta, x = 0, \dot{x} = 40 \cos \theta$

Vertically:  $\ddot{y} = -10 \rightarrow \dot{y} = -10t + c$

$t = 0, \dot{y} = 40 \sin \theta \rightarrow c = 40 \sin \theta$

$\therefore \dot{y} = 40 \sin \theta - 10t$

$\therefore y = 40t \sin \theta - 5t^2 + c$

$0 = 40 \sin \theta \times 0 - 5 \times 0 + c \rightarrow c = 0$

$\therefore y = 40t \sin \theta - 5t^2$

Horizontally:  $\ddot{x} = 0 \rightarrow \dot{x} = 40 \cos \theta$

$\therefore x = 40t \cos \theta + c$

$0 = 40 \cos \theta \times 0 + c \rightarrow c = 0$

$\therefore x = 40t \cos \theta$

ii) When  $y = 0, 0 = t(40 \sin \theta - 5t)$

$\therefore$  when it strikes the ground  $t = 8 \sin \theta$

$\therefore$  when  $t = 8 \sin \theta, x = 80$

$\therefore 80 = 40 \cos \theta \times 8 \sin \theta$

$$\frac{1}{2} = 2 \sin \theta \cos \theta$$

$$\frac{1}{2} = \sin 2\theta$$

$\therefore 2\theta = 30^\circ, 180^\circ - 30^\circ$

hence the two angles are  $15^\circ$  and  $75^\circ$ .