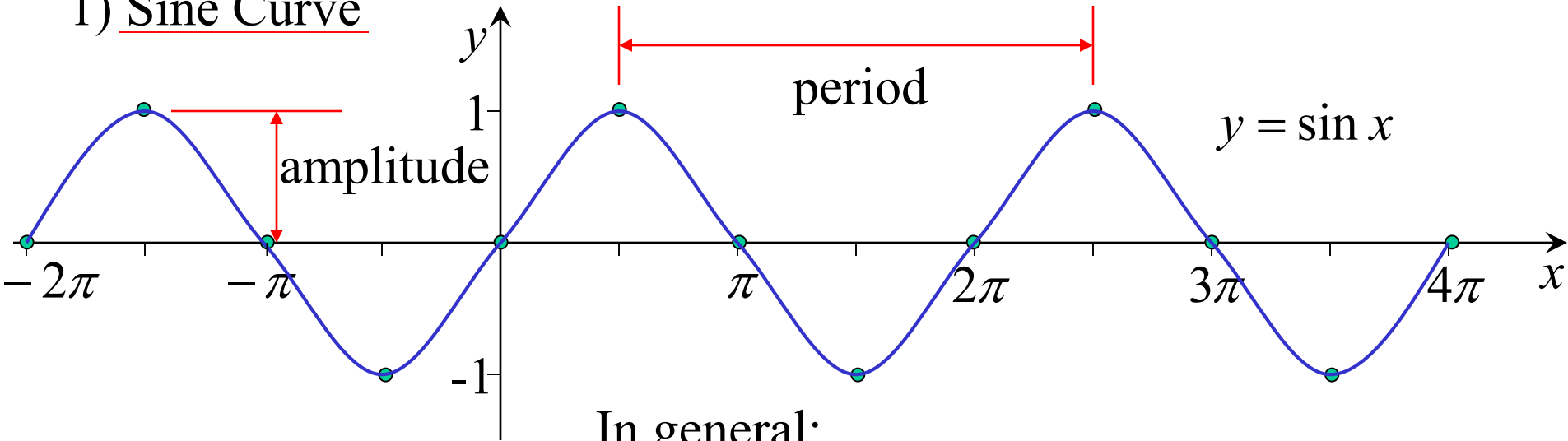


Graphing Trig Functions

1) Sine Curve



In general;

domain : all real x
range : $-1 \leq y \leq 1$

odd function
 $\sin(-x) = -\sin x$

$$y = a \sin(bx + c)$$

$$\text{period} = \frac{2\pi}{b} \text{ units}$$

$$\text{amplitude} = a \text{ units}$$

$$\text{divisions} = \frac{\text{period}}{4}$$

$$\text{phase} = \frac{c}{b}$$

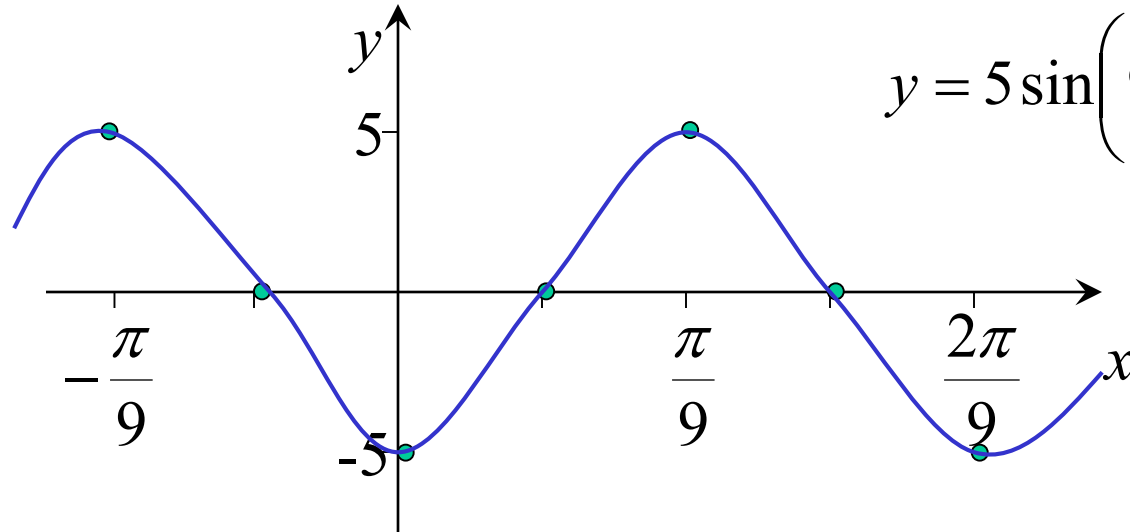
e.g. $y = 5 \sin\left(9x - \frac{\pi}{2}\right)$

period = $\frac{2\pi}{9}$ units

amplitude = 5 units

divisions = $\frac{\pi}{18}$

shift = $\frac{\pi}{18}$ to right



$y = 5 \sin\left(9x - \frac{\pi}{2}\right)$

2) Cosine Curve

$$y = a \cos(bx + c)$$

even function

$$\cos(-x) = \cos x$$

$$\text{period} = \frac{2\pi}{b} \text{ units}$$

$$\text{amplitude} = a \text{ units}$$

$$\text{divisions} = \frac{\text{period}}{4}$$

$$\text{phase} = \frac{c}{b}$$

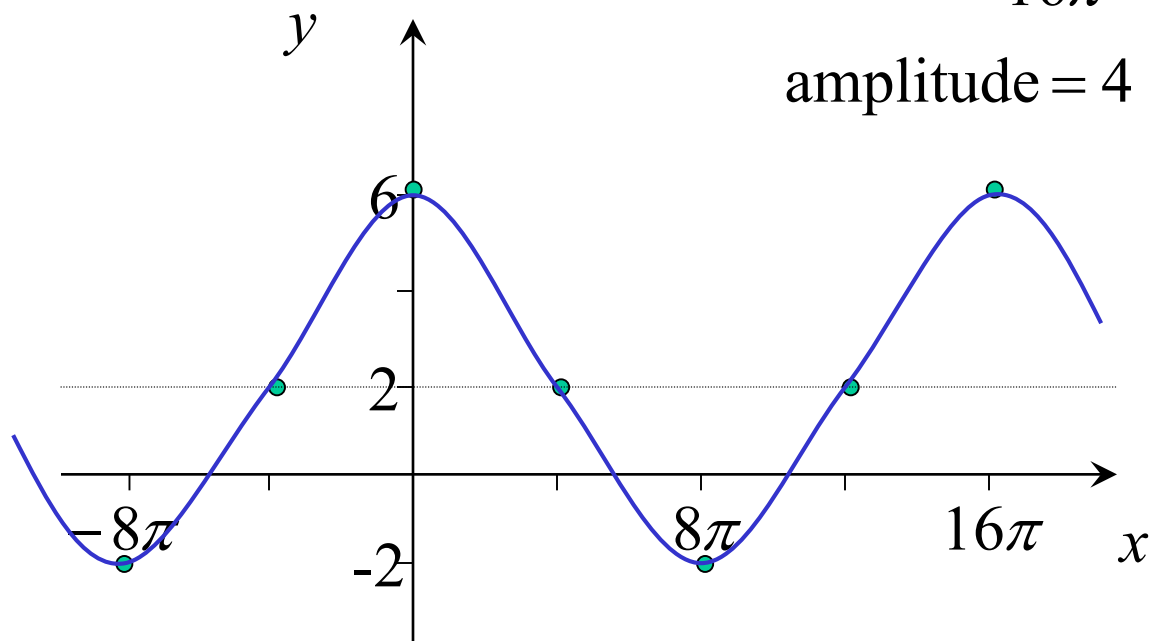
e.g. $y = -4 \cos\left(\frac{x}{8} + \pi\right) + 2$ period = $\frac{2\pi}{\frac{1}{8}}$

$$\text{divisions} = 4\pi$$

shift = 8π to left, 2 up,
upside down

$$= 16\pi$$

$$\text{amplitude} = 4$$



$$y = -4 \cos\left(\frac{x}{8} + \pi\right) + 2$$

3) Tangent Curve

odd function

$$\tan(-x) = -\tan x$$

$$y = a \tan(bx + c)$$

$$\text{period} = \frac{\pi}{b} \text{ units}$$

$$\text{divisions} = \frac{\text{period}}{2}$$

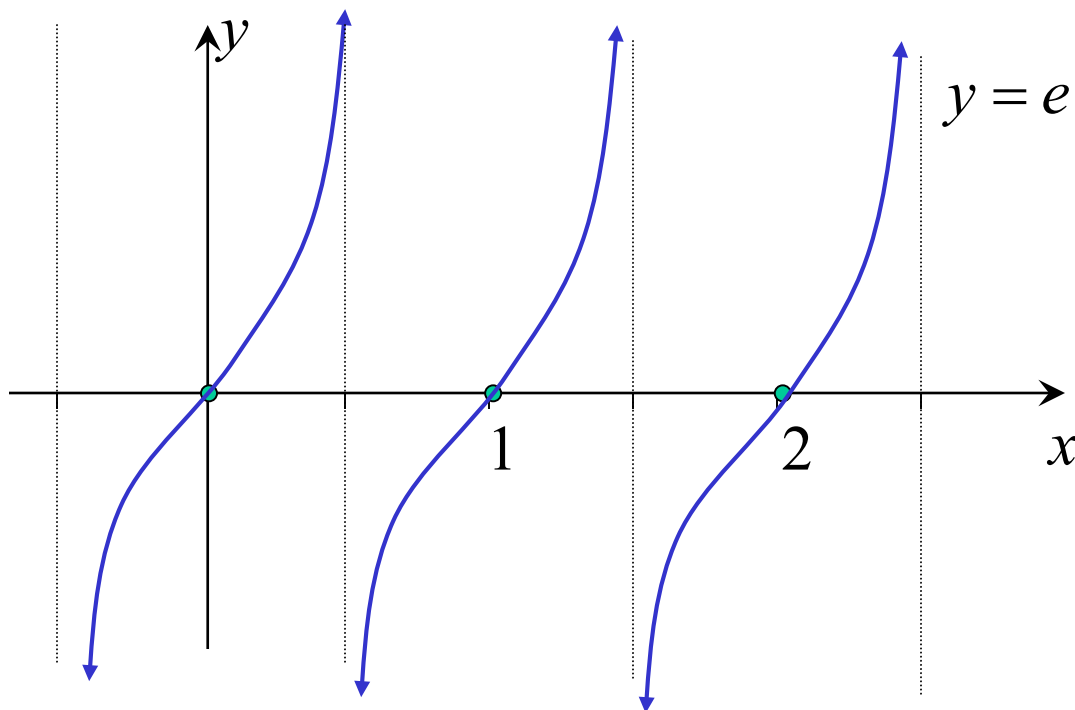
$$\text{phase} = \frac{c}{b}$$

e.g. $y = e \tan(\pi x - 2\pi)$

$$\text{period} = \frac{\pi}{\pi} = 1$$

$$\text{divisions} = \frac{1}{2}$$

shift = 2 to right



**Exercise 3J; 1 to 5 (ii),
6, 7b, 8b, 10, 11b,
13, 14, 16, 19**