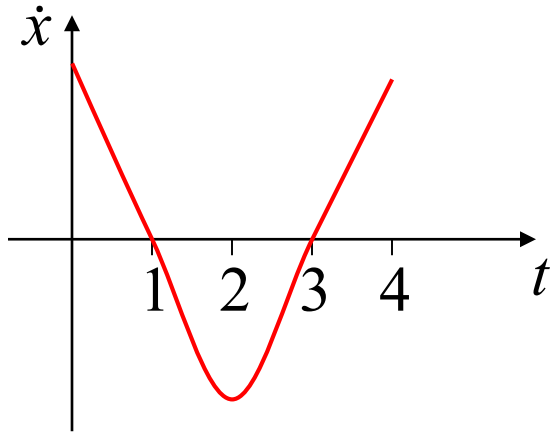
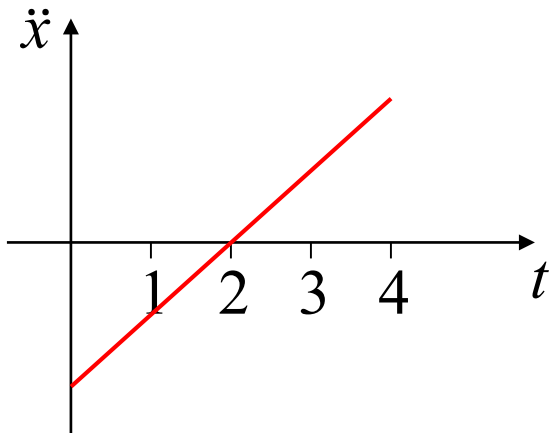


Integrating Functions of Time



$$\text{change in displacement} = \int_0^4 \dot{x} dt$$

$$\text{change in distance} = \int_0^1 \dot{x} dt - \int_1^3 \dot{x} dt + \int_3^4 \dot{x} dt$$



$$\text{change in velocity} = \int_0^4 \ddot{x} dt$$

$$\text{change in speed} = -\int_0^2 \ddot{x} dt + \int_2^4 \ddot{x} dt$$

Derivative Graphs

Function <i>displacement</i>	1st derivative <i>velocity</i>	2nd derivative <i>acceleration</i>
stationary point	x intercept	
inflection point	stationary point	x intercept
increasing	positive	
decreasing	negative	
concave up	increasing	positive
concave down	decreasing	negative

graph type	integrate	differentiate
horizontal line	oblique line	x axis
oblique line	parabola	horizontal line
parabola	cubic <i>inflects at turning pt</i>	oblique line

Remember:

- integration = area
- on a velocity graph, total area = distance
total integral = displacement
- on an acceleration graph, total area = speed
total integral = velocity

a) 2003 HSC Question 7b)

The velocity of a particle is given by $v = 2 - 4 \cos t$ for $0 \leq t \leq 2\pi$, where v is measured in metres per second and t is measured in seconds

(i) At what times during this period is the particle at rest?

$$v = 0$$

$$2 - 4 \cos t = 0$$

$$\cos t = \frac{1}{2}$$

$$Q1, 4$$

$$\cos \alpha = \frac{1}{2}$$

$$\alpha = \frac{\pi}{3}$$

$$t = \alpha, 2\pi - \alpha$$

$$t = \frac{\pi}{3}, \frac{5\pi}{3}$$

\therefore particle is at rest after $\frac{\pi}{3}$ seconds and again after $\frac{5\pi}{3}$ seconds

(ii) What is the maximum velocity of the particle during this period?

$$-4 \leq -4 \cos t \leq 4$$

$$-2 \leq 2 - 4 \cos t \leq 6$$

\therefore maximum velocity is 6 m/s

(iii) Sketch the graph of v as a function of t for $0 \leq t \leq 2\pi$

amplitude = 4 units

shift = \uparrow 2 units

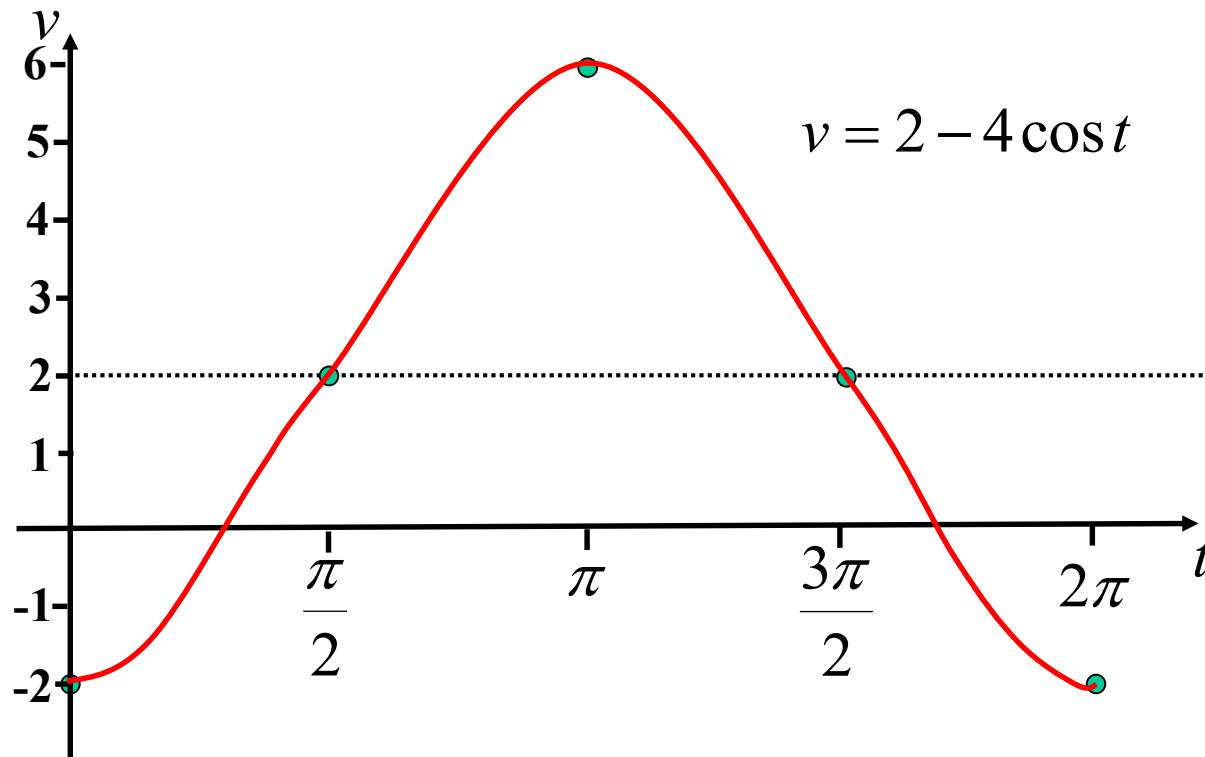
flip upside down

$$\text{period} = \frac{2\pi}{1}$$

$$= 2\pi$$

$$\text{divisions} = \frac{2\pi}{4}$$

$$= \frac{\pi}{2}$$

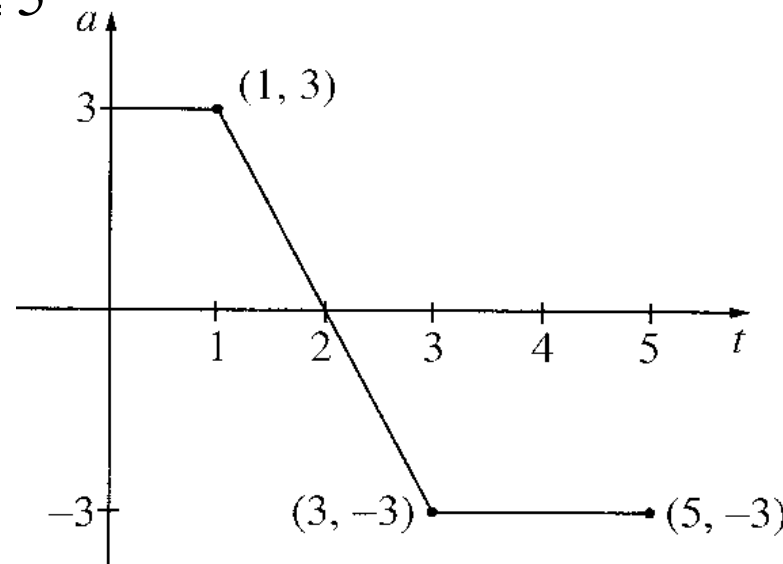


(iv) Calculate the total distance travelled by the particle between $t = 0$ and $t = \frac{\pi}{3}$

$$\begin{aligned}\text{distance} &= -\int_0^{\frac{\pi}{3}} (2 - 4 \cos t) dt + \int_{\frac{\pi}{3}}^{\pi} (2 - 4 \cos t) dt \\ &= [2t - 4 \sin t]_0^{\frac{\pi}{3}} + [2t - 4 \sin t]_{\frac{\pi}{3}}^{\pi} \\ &= (0 - 0) + (2\pi - 4 \sin \pi) - 2 \left(\frac{2\pi}{3} - 4 \sin \frac{\pi}{3} \right) \\ &= 2\pi - 2 \left(\frac{2\pi}{3} - \frac{4\sqrt{3}}{2} \right) \\ &= \underline{4\sqrt{3} + \frac{2\pi}{3}} \text{ metres}\end{aligned}$$

b) 2004 HSC Question 9b)

A particle moves along the x -axis. Initially it is at rest at the origin. The graph shows the acceleration, a , of the particle as a function of time t for $0 \leq t \leq 5$



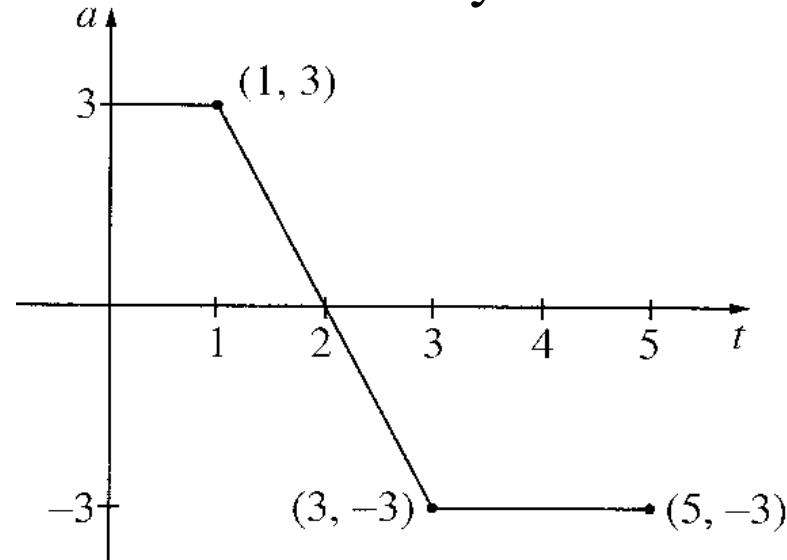
(i) Write down the time at which the velocity of the particle is a maximum

$$v = \int a dt \quad \text{OR} \quad v \text{ is a maximum when } \frac{dv}{dt} = 0$$

$$\int a dt \text{ is a maximum when } t = 2$$

\therefore velocity is a maximum when $t = 2$ seconds

(ii) At what time during the interval $0 \leq t \leq 5$ is the particle furthest from the origin? Give reasons for your answer.



Question is asking, “when is displacement a maximum?”

x is a maximum when $\frac{dx}{dt} = 0$

But $v = \int a dt$

\therefore We must solve $\int a dt = 0$

i.e. when is area above the axis = area below

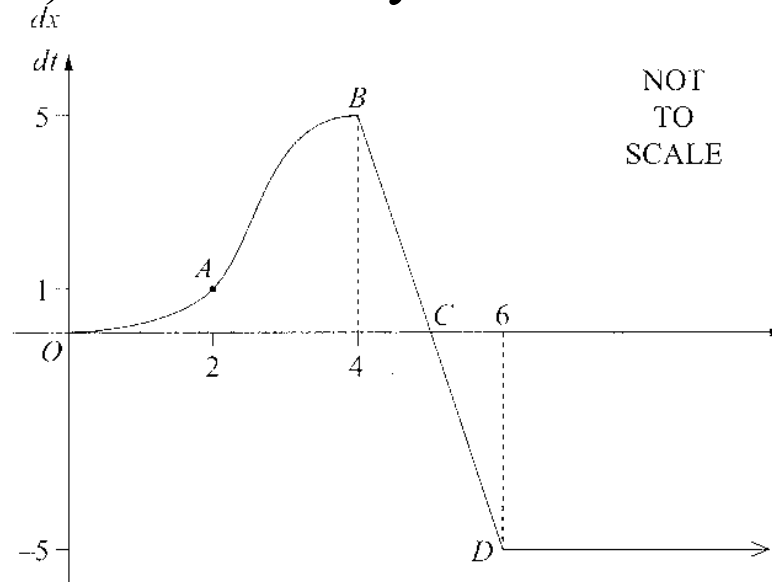
By symmetry this would be at $t = 4$

\therefore particle is furthest from the origin at $t = 4$ seconds

c) 2007 HSC Question 10a)

An object is moving on the x -axis. The graph shows the velocity, $\frac{dx}{dt}$, of the object, as a function of t .

The coordinates of the points shown on the graph are $A(2,1)$, $B(4,5)$, $C(5,0)$ and $D(6,-5)$. The velocity is constant for $t \geq 6$



(i) Using the Trapezoidal Rule, estimate the distance travelled between $t = 0$ and $t = 4$

$$\begin{aligned} \text{distance} &\approx \frac{h}{2} \{y_0 + 2y_{\text{others}} + y_n\} \\ &= \frac{2}{2} \{0 + 2(1) + 5\} \\ &= \underline{7 \text{ metres}} \end{aligned}$$

	1	2	1
t	0	2	4
v	0	1	5

(ii) The object is initially at the origin. During which time(s) is the displacement decreasing?

$$x \text{ is decreasing when } \frac{dx}{dt} < 0$$

\therefore displacement is decreasing when $t > 5$ seconds

(iii) Estimate the time at which the object returns to the origin. Justify your answer.

Question is asking, “when is displacement = 0?”

$$\text{But } x = \int v dt$$

$$\therefore \text{ We must solve } \int v dt = 0$$

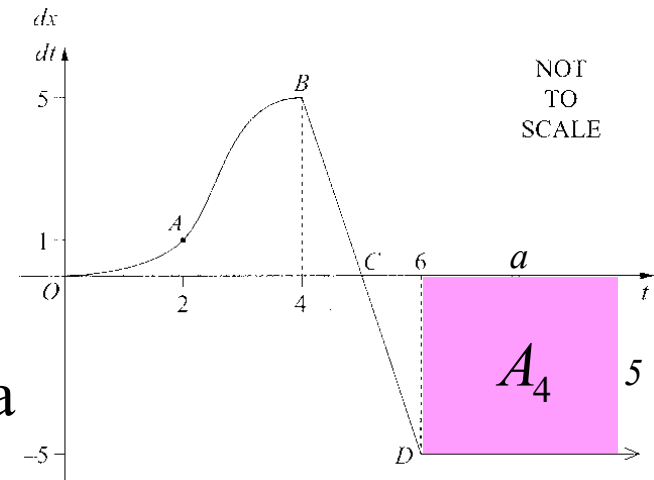
i.e. when is area above the axis = area below

By symmetry, area from $t = 4$ to 5 equals area from $t = 5$ to 6

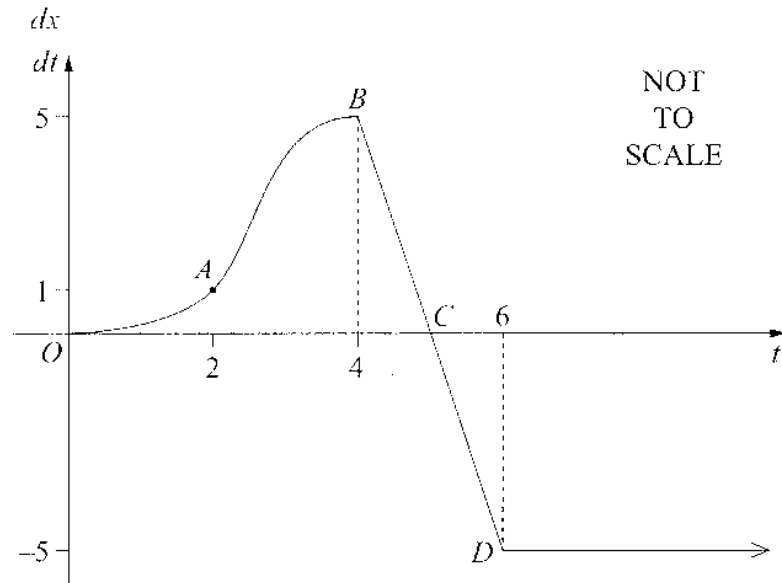
In part (i) we estimated area from $t = 0$ to 4 to be 7,

$$\therefore A_4 = 7 \quad a = 1.4$$

$$5a = 7 \quad \therefore \text{ particle returns to the origin when } t = 7.4 \text{ seconds}$$



(iv) Sketch the displacement, x , as a function of time.



object is initially at the origin
when $t = 4, x = 7$

by symmetry of areas $t = 6, x = 7$
Area of triangle = 2.5

\therefore when $t = 5, x = 9.5$

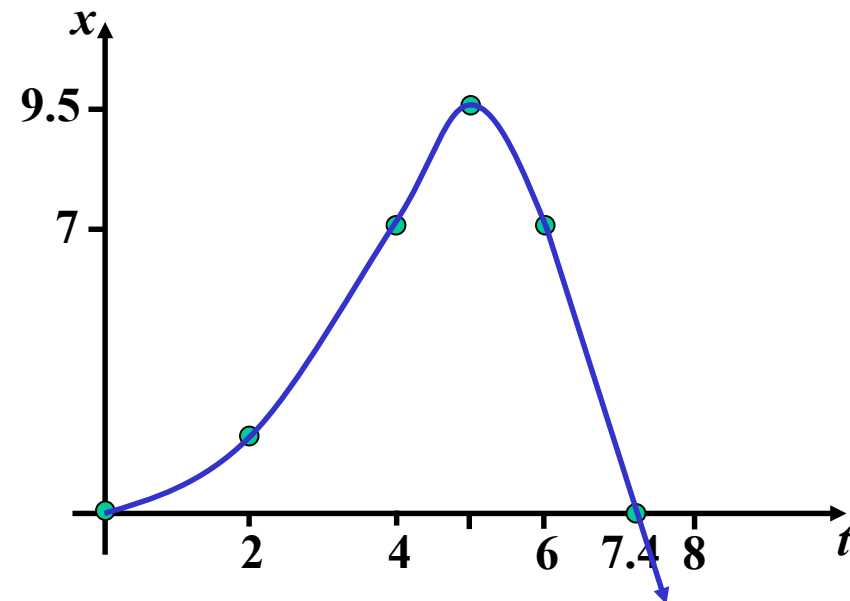
returns to $x = 0$ when $t = 7.4$

v is steeper between $t = 2$ and 4
than between $t = 0$ and 2

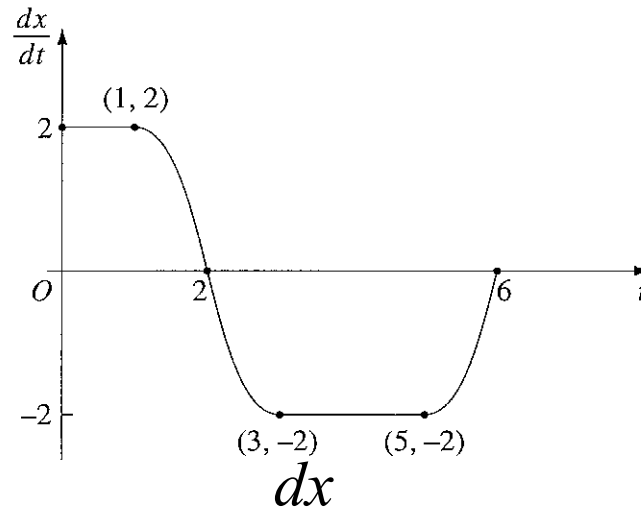
\therefore particle covers more distance
between $t = 2$ and 4

when $t > 6, v$ is constant

\therefore when $t > 6, x$ is a straight line



d) 2005 HSC Question 7b)



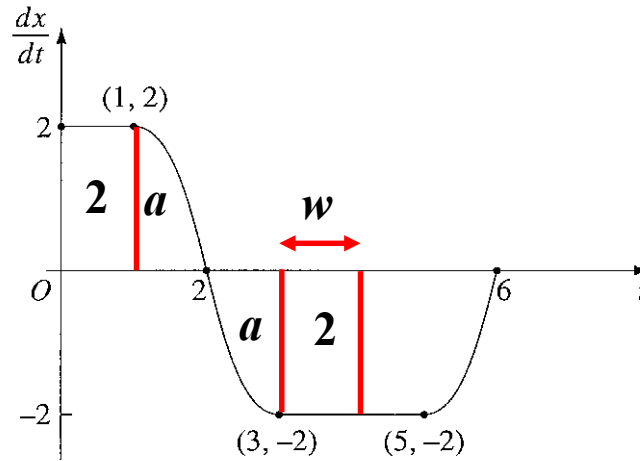
The graph shows the velocity, $\frac{dx}{dt}$, of a particle as a function of time. Initially the particle is at the origin.

(i) At what time is the displacement, x , from the origin a maximum?

Displacement is a maximum when area is most positive, also when velocity is zero

i.e. when $t = 2$

(ii) At what time does the particle return to the origin? Justify your answer



Question is asking, “when is displacement = 0?”

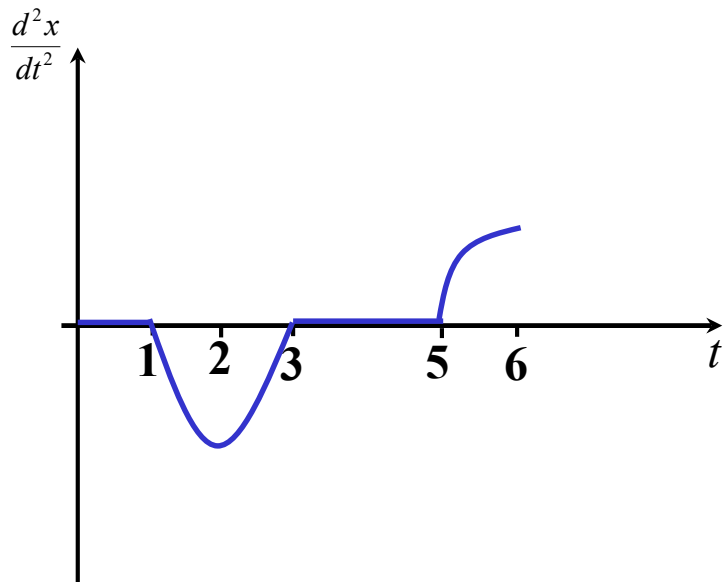
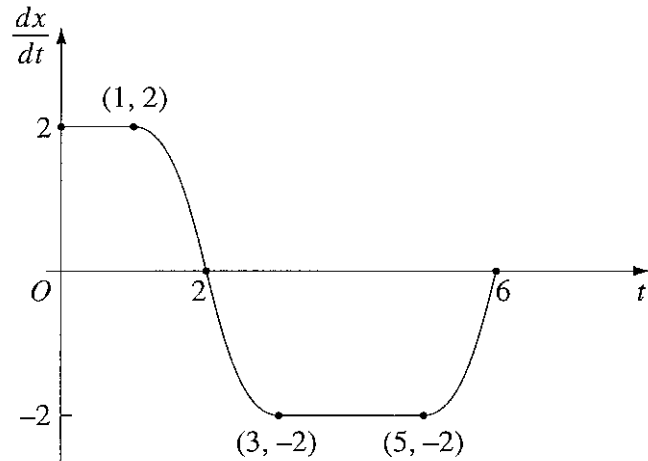
i.e. when is area above the axis = area below?

$$2w = 2$$

$$w = 1$$

Returns to the origin after 4 seconds

(iii) Draw a sketch of the acceleration, $\frac{d^2x}{dt^2}$, as a function of time for $0 \leq t \leq 6$



differentiate a horizontal line
you get the x axis

from 1 to 3 we have a cubic,
inflects at 2, and is decreasing

differentiate, you get a parabola,
stationary at 2, it is below the x axis

from 5 to 6 is a cubic, inflects at 6
and is increasing (*using symmetry*)

differentiate, you get a parabola
stationary at 6, it is above the x axis

Exercise 9C; 3, 4, 6, 10, 12, 13, 15, 17a, 18